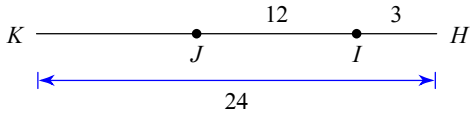


Name:
Grade:

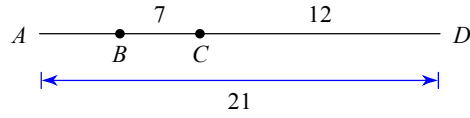
Date:

Segment Addition Postulate

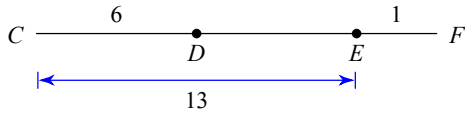
1) Find KJ



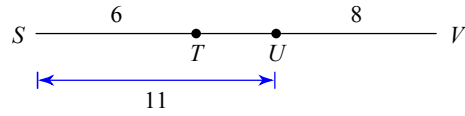
2) Find AB



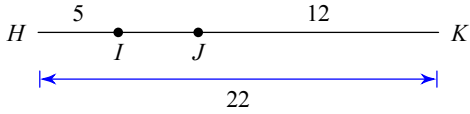
3) Find DF



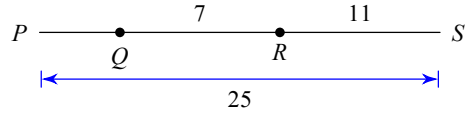
4) Find TV



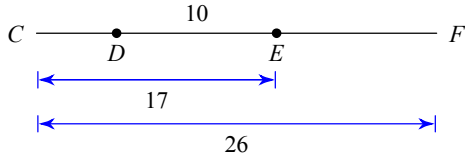
5) Find IJ



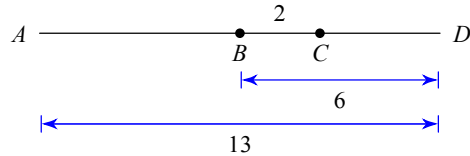
6) Find PQ



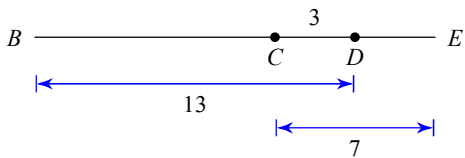
7) Find DF



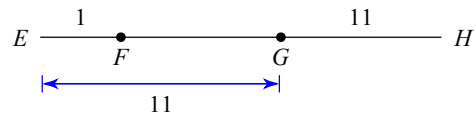
8) Find AC



9) Find BE



10) Find FH



Name:
Grade:

Date:

Answers to

- 1) 9
- 4) 13
- 7) 19
- 10) 21

- 2) 2
- 5) 5
- 8) 9

- 3) 8
- 6) 7
- 9) 17