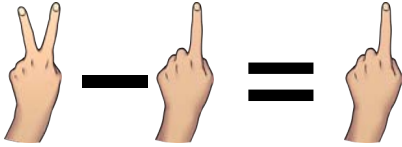


Date :

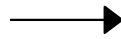
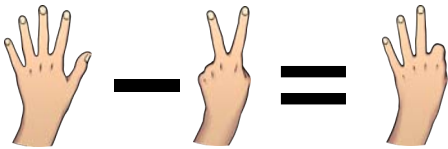
Name :

Grade :


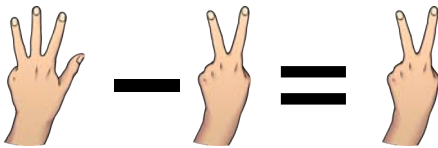
Count Fingers and write subtraction equation




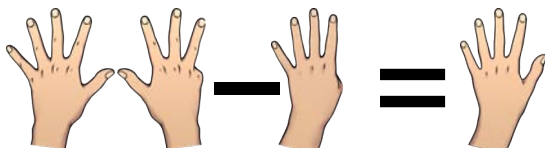
$$\square - \square = \square$$



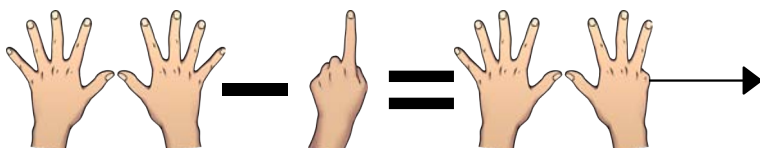
$$\square - \square = \square$$



$$\square - \square = \square$$



$$\square - \square = \square$$



$$\square - \square = \square$$