


Date :

Name :


Grade :

Identify where each set of points should be placed on the number lines below.

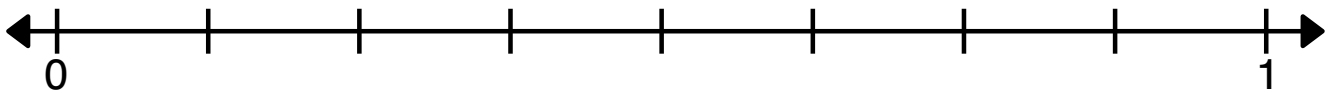
$\frac{3}{5}$ $\frac{2}{5}$ $\frac{4}{5}$ $\frac{1}{5}$




$\frac{1}{3}$ $\frac{2}{3}$



$\frac{3}{8}$ $\frac{4}{8}$ $\frac{5}{8}$ $\frac{1}{8}$



$\frac{2}{3}$ $\frac{1}{3}$



$\frac{4}{5}$ $\frac{2}{5}$ $\frac{1}{5}$ $\frac{3}{5}$

