

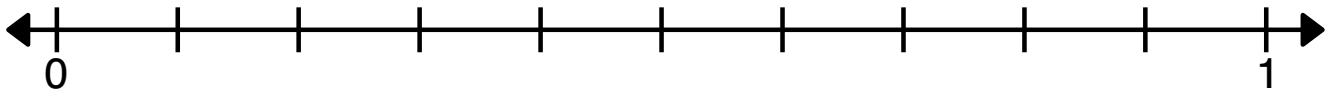
Date :

Name :

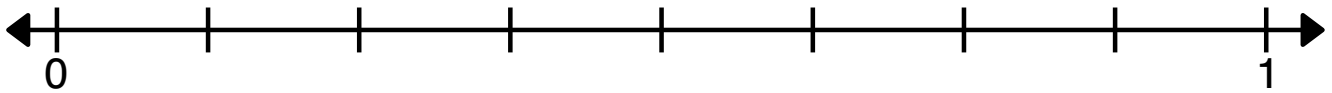
Grade :

Identify where each set of points should be placed on the number lines below.

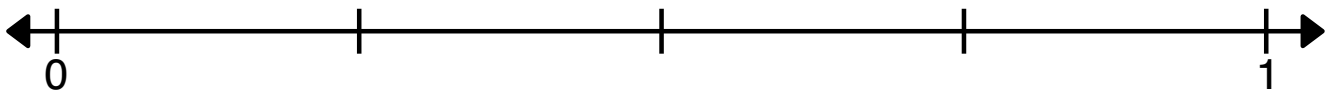
$$\frac{2}{10} \quad \frac{7}{10} \quad \frac{5}{10} \quad \frac{9}{10}$$



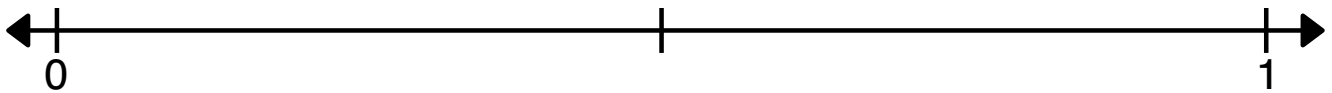
$$\frac{5}{8} \quad \frac{6}{8} \quad \frac{2}{8} \quad \frac{7}{8}$$



$$\frac{2}{4} \quad \frac{3}{4} \quad \frac{1}{4}$$



$$\frac{1}{2}$$



$$\frac{8}{10} \quad \frac{6}{10} \quad \frac{3}{10} \quad \frac{1}{10}$$

