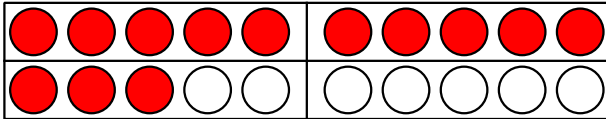


Date :

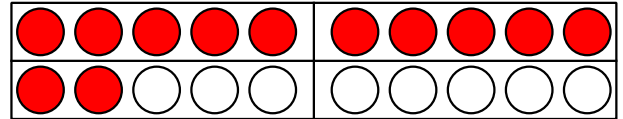
Name :

Grade :

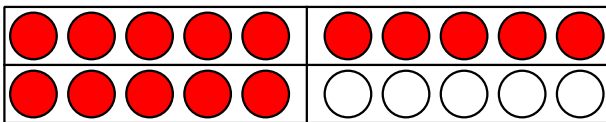
Subtraction - Double Ten frame



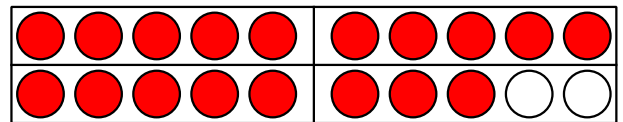
$$13 - \underline{\quad} = 6$$



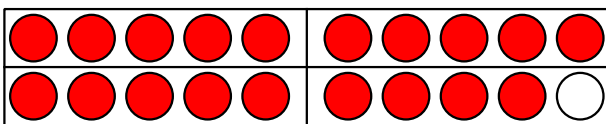
$$12 - \underline{\quad} = 8$$



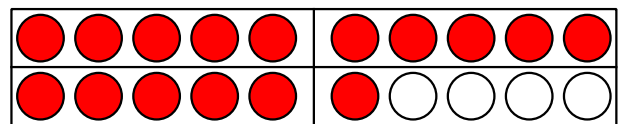
$$15 - \underline{\quad} = 12$$



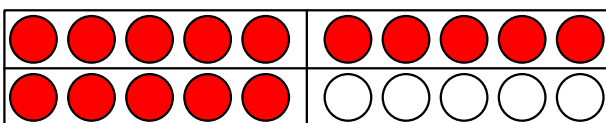
$$18 - \underline{\quad} = 16$$



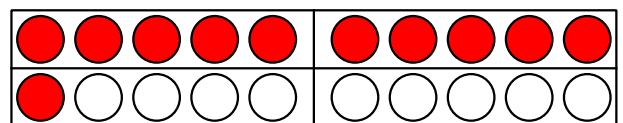
$$19 - \underline{\quad} = 13$$



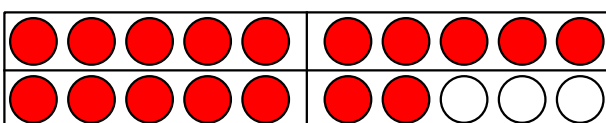
$$16 - \underline{\quad} = 13$$



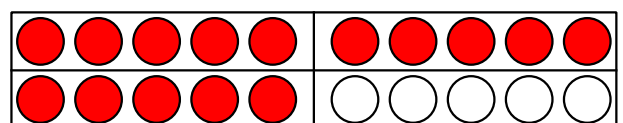
$$15 - \underline{\quad} = 9$$



$$11 - \underline{\quad} = 0$$



$$17 - \underline{\quad} = 9$$



$$15 - \underline{\quad} = 13$$