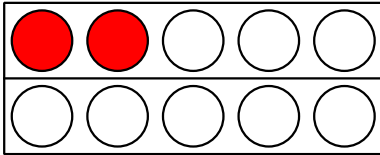


Date :

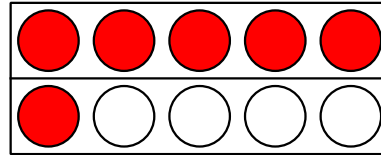
Name :

Grade :

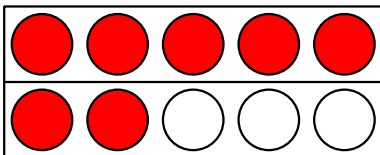
Subtraction - Ten frame



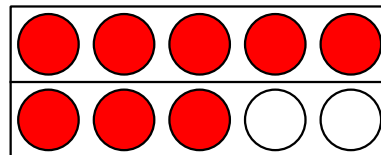
$$2 - \underline{\quad} = 0$$



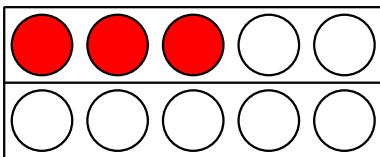
$$6 - \underline{\quad} = 2$$



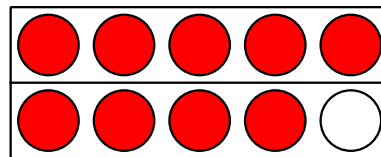
$$7 - \underline{\quad} = 6$$



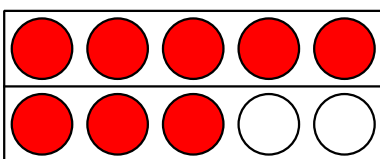
$$8 - \underline{\quad} = 4$$



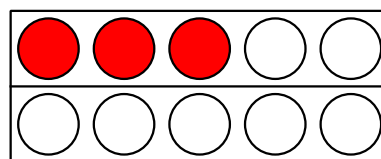
$$3 - \underline{\quad} = 2$$



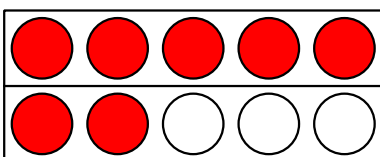
$$9 - \underline{\quad} = 0$$



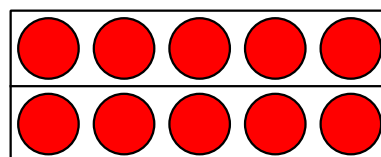
$$8 - \underline{\quad} = 2$$



$$3 - \underline{\quad} = 2$$



$$7 - \underline{\quad} = 4$$



$$10 - \underline{\quad} = 7$$