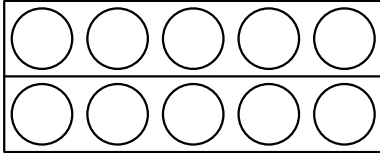


Date :

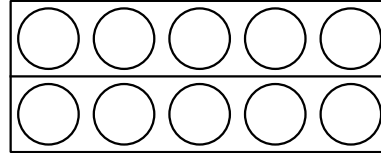
Name :

Grade :

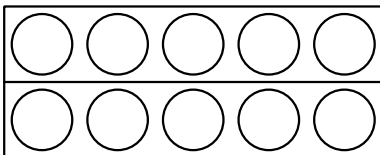
Subtraction - Ten frame



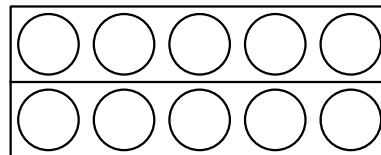
$10 - 2 = \underline{\quad}$



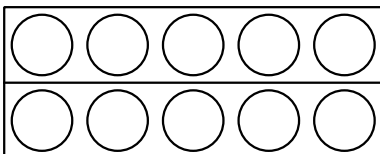
$10 - 4 = \underline{\quad}$



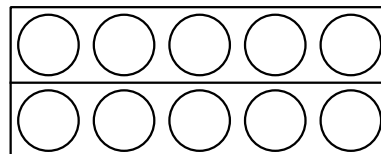
$2 - 1 = \underline{\quad}$



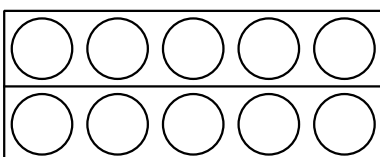
$9 - 4 = \underline{\quad}$



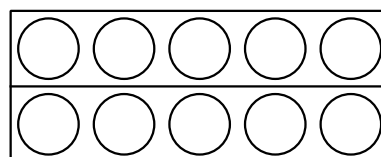
$9 - 7 = \underline{\quad}$



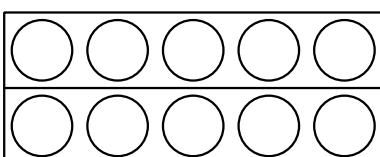
$10 - 2 = \underline{\quad}$



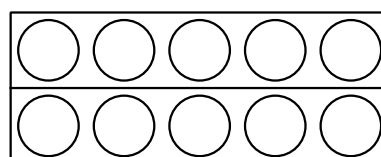
$6 - 6 = \underline{\quad}$



$4 - 2 = \underline{\quad}$



$5 - 2 = \underline{\quad}$



$3 - 3 = \underline{\quad}$