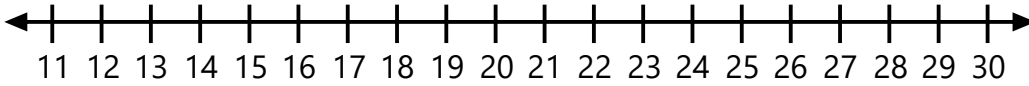


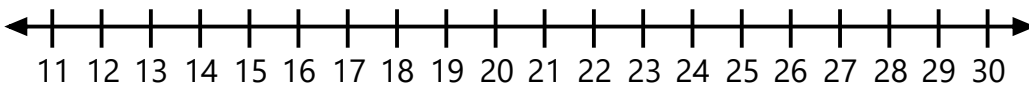
Name:
Grade:

Date:

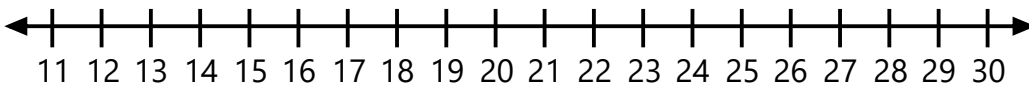
Find Addend Using Number Line



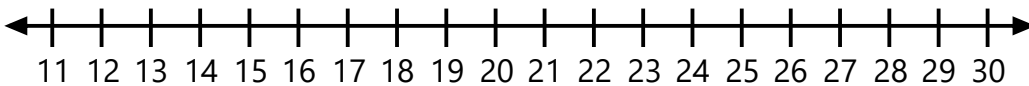
$$\underline{\quad} + 11 = 24$$



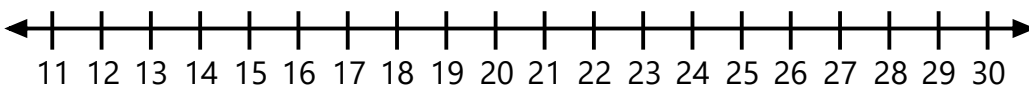
$$12 + \underline{\quad} = 27$$



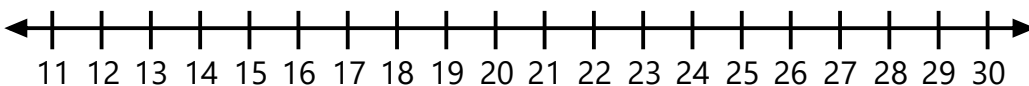
$$\underline{\quad} + 15 = 30$$



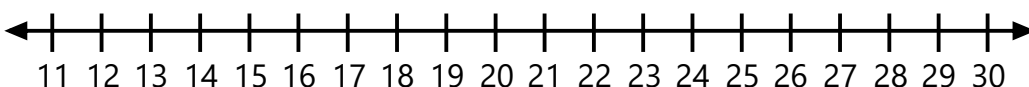
$$\underline{\quad} + 11 = 23$$



$$1 + \underline{\quad} = 21$$



$$\underline{\quad} + 12 = 26$$



$$\underline{\quad} + 14 = 29$$