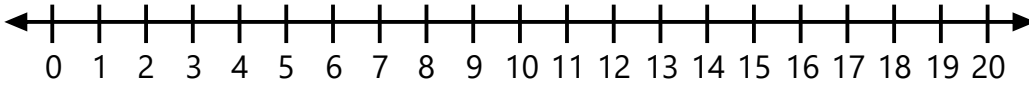


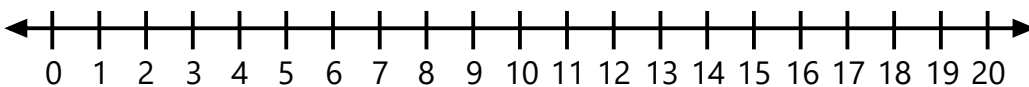
Name:  
Grade:

Date:

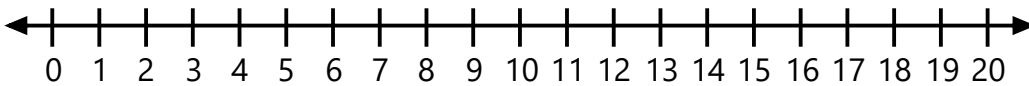
## Find Addend Using Number Line



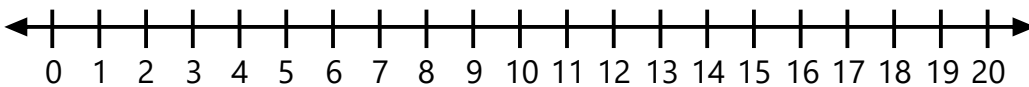
$9 + \underline{\quad} = 11$



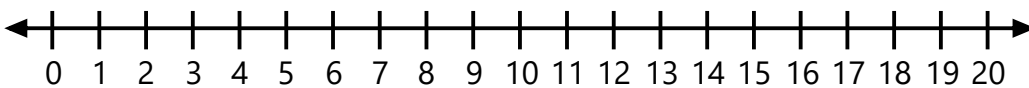
$7 + \underline{\quad} = 14$



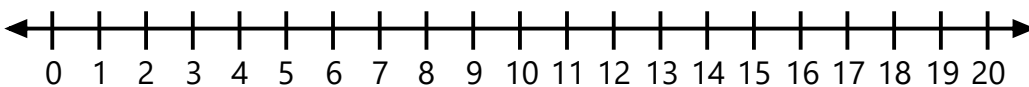
$\underline{\quad} + 7 = 10$



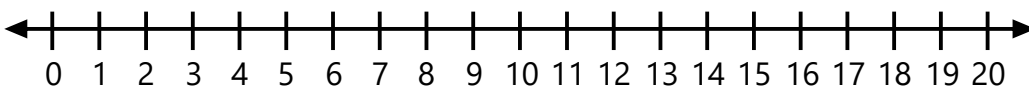
$\underline{\quad} + 8 = 12$



$\underline{\quad} + 9 = 16$



$\underline{\quad} + 4 = 20$



$8 + \underline{\quad} = 13$