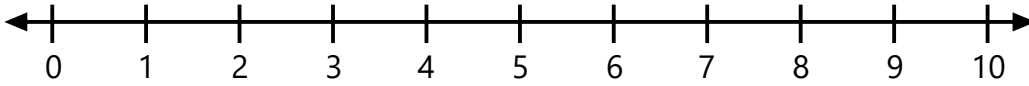


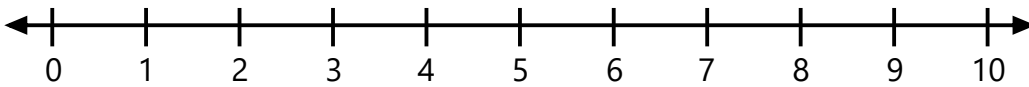
Name:
Grade:

Date:

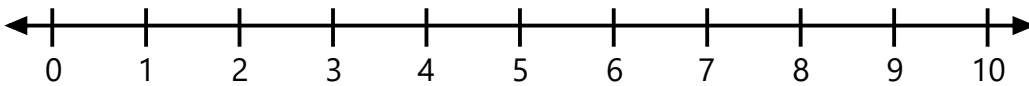
Find Addend Using Number Line



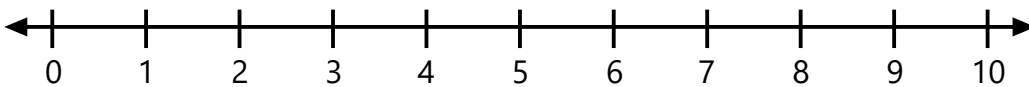
$$\underline{\quad} + 1 = 3$$



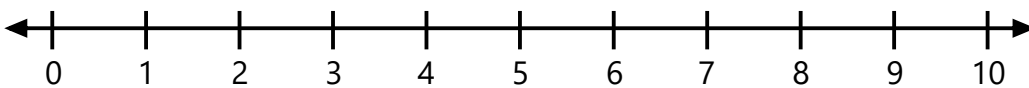
$$\underline{\quad} + 4 = 7$$



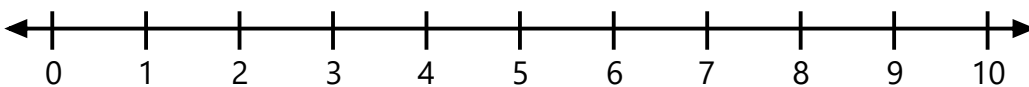
$$3 + \underline{\quad} = 10$$



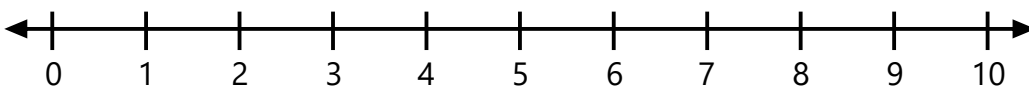
$$\underline{\quad} + 8 = 9$$



$$3 + \underline{\quad} = 8$$



$$2 + \underline{\quad} = 6$$



$$1 + \underline{\quad} = 2$$